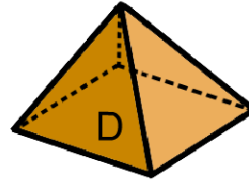
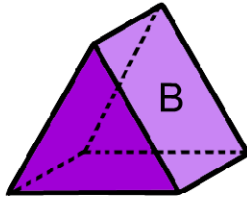
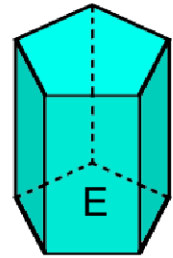
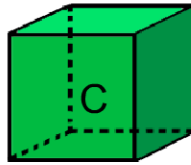
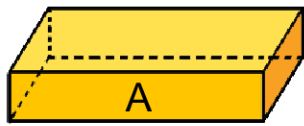


Nom : .....

Date : .....

1) Observe bien ces solides puis complète le tableau.



Solides	Nombre de faces	Nombre de sommets	Nombre d'arêtes
A			
B			
C			
D			
E			

2) Reproduis le solide rouge dans les 3 autres cadres.

