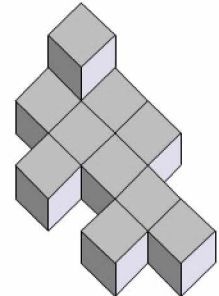
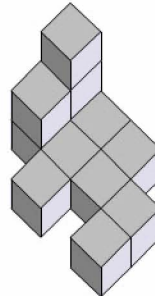
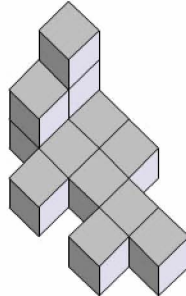
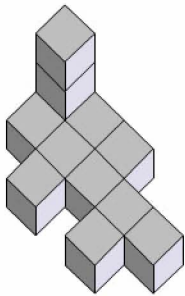
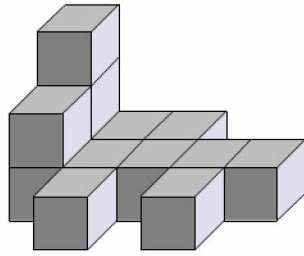


Nom :

Date :

1/ Associe ce solide à sa perspective. Entoure la bonne réponse.



2/ À quel solide correspond cette perspective ? Entoure la bonne réponse.

