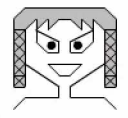

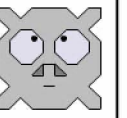


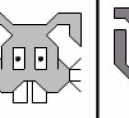
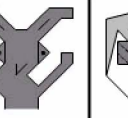

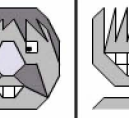










CALCUL : soustraction de nombres supérieurs à 100 (soustraction codée)








Nom :

Date :

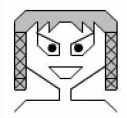

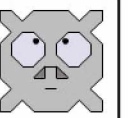

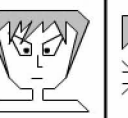
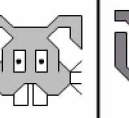
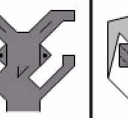

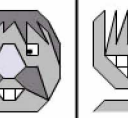

1/ Effectue ces soustractions en t'aidant du code ci-dessous.
Écris la réponse en chiffres.








									
0	1	2	3	4	5	6	7	8	9








			
-			
.....

			
-			
.....

2/ Effectue ces soustractions en t'aidant du code ci-dessous.
Découpe les vignettes en bas de page et colle la bonne réponse.

									
0	1	2	3	4	5	6	7	8	9

			
-			
.....

			
-			
.....

